




5. Count the set of suns. Now draw a set of suns that is the same number in the empty box.

	
---	--

6. Count the set of butterflies. Now draw a set of butterflies that is 1 less in the empty box.

	
---	--

7. Count the colored circles in each line. Write how many in each box. Then circle the line that has more colored circles.

<input type="text"/>	
<input type="text"/>	